

Name: _____

Print the page & sort out how fast the items below are,
cut and paste
or if using interactive slides drag and drop your answers.





**Slow-
Largo**



**Medium-
Andante**



**Fast-
Presto**



Name: _____

What is the speed of music called?


A) Drum set

B) Form

C) Tempo

Draw a line matching the tempo markings to their speed:

Andante



Slow

Largo



Medium

Presto



Fast